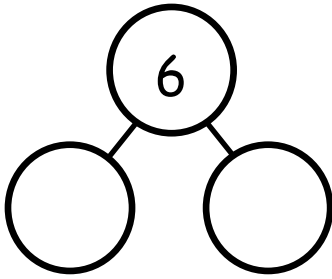




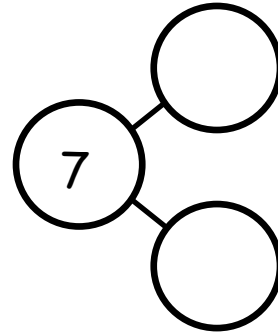
Name _____

Date _____

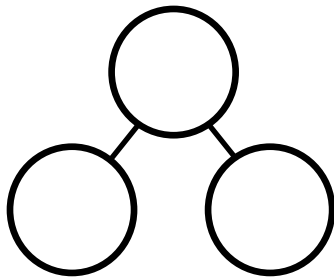
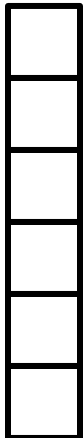
These squares represent cubes. Draw a line to break the stick into 2 parts. Complete the number bond and number sentence.



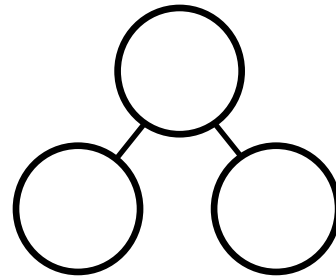
6 is and



is and



is and



is and

On the back of your paper, draw a cube stick with some red cubes and some blue cubes. Draw a number bond to match.